

Chapter 16

INTEGRATION IN VECTOR FIELDS

OVERVIEW This chapter treats integration in vector fields. It is the mathematics that engineers and physicists use to describe fluid flow, design underwater transmission cables, explain the flow of heat in stars, and put satellites in orbit. In particular, we define line integrals, which are used to find the work done by a force field in moving an object along a path through the field. We also define surface integrals so we can find the rate that a fluid flows across a surface. Along the way we develop key concepts and results, such as *conservative* force fields and Green's Theorem, to simplify our calculations of these new integrals by connecting them to the single, double, and triple integrals we have already studied.

16.1

Line Integrals

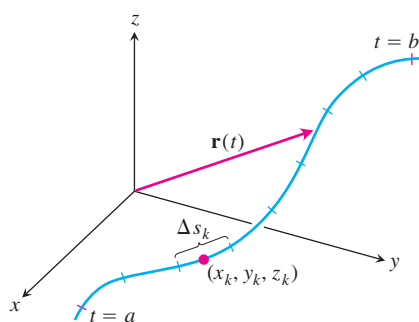


FIGURE 16.1 The curve $\mathbf{r}(t)$ partitioned into small arcs from $t = a$ to $t = b$. The length of a typical subarc is Δs_k .

In Chapter 5 we defined the definite integral of a function over a finite closed interval $[a, b]$ on the x -axis. We used definite integrals to find the mass of a thin straight rod, or the work done by a variable force directed along the x -axis. Now we would like to calculate the masses of thin rods or wires lying along a *curve* in the plane or space, or to find the work done by a variable force acting along such a curve. For these calculations we need a more general notion of a “line” integral than integrating over a line segment on the x -axis. Instead we need to integrate over a curve C in the plane or in space. These more general integrals are called *line integrals*, although “curve” integrals might be more descriptive. We make our definitions for space curves, remembering that curves in the xy -plane are just a special case with z -coordinate identically zero.

Suppose that $f(x, y, z)$ is a real-valued function we wish to integrate over the curve $\mathbf{r}(t) = g(t)\mathbf{i} + h(t)\mathbf{j} + k(t)\mathbf{k}$, $a \leq t \leq b$, lying within the domain of f . The values of f along the curve are given by the composite function $f(g(t), h(t), k(t))$. We are going to integrate this composite with respect to arc length from $t = a$ to $t = b$. To begin, we first partition the curve into a finite number n of subarcs (Figure 16.1). The typical subarc has length Δs_k . In each subarc we choose a point (x_k, y_k, z_k) and form the sum

$$S_n = \sum_{k=1}^n f(x_k, y_k, z_k) \Delta s_k.$$

If f is continuous and the functions g , h , and k have continuous first derivatives, then these sums approach a limit as n increases and the lengths Δs_k approach zero. We call this limit the **line integral of f over the curve from a to b** . If the curve is denoted by a single letter, C for example, the notation for the integral is

$$\int_C f(x, y, z) \, ds \quad \text{“The integral of } f \text{ over } C\text{”} \quad (1)$$

If $\mathbf{r}(t)$ is smooth for $a \leq t \leq b$ ($\mathbf{v} = d\mathbf{r}/dt$ is continuous and never $\mathbf{0}$), we can use the equation

$$s(t) = \int_a^t |\mathbf{v}(\tau)| d\tau \quad \text{Equation (3) of Section 13.3} \\ \text{with } t_0 = a$$

to express ds in Equation (1) as $ds = |\mathbf{v}(t)| dt$. A theorem from advanced calculus says that we can then evaluate the integral of f over C as

$$\int_C f(x, y, z) ds = \int_a^b f(g(t), h(t), k(t)) |\mathbf{v}(t)| dt.$$

Notice that the integral on the right side of this last equation is just an ordinary (single) definite integral, as defined in Chapter 5, where we are integrating with respect to the parameter t . The formula evaluates the line integral on the left side correctly no matter what parametrization is used, as long as the parametrization is smooth.

How to Evaluate a Line Integral

To integrate a continuous function $f(x, y, z)$ over a curve C :

1. Find a smooth parametrization of C ,

$$\mathbf{r}(t) = g(t)\mathbf{i} + h(t)\mathbf{j} + k(t)\mathbf{k}, \quad a \leq t \leq b$$

2. Evaluate the integral as

$$\int_C f(x, y, z) ds = \int_a^b f(g(t), h(t), k(t)) |\mathbf{v}(t)| dt. \quad (2)$$

If f has the constant value 1, then the integral of f over C gives the length of C .

EXAMPLE 1 Evaluating a Line Integral

Integrate $f(x, y, z) = x - 3y^2 + z$ over the line segment C joining the origin to the point $(1, 1, 1)$ (Figure 16.2).

Solution We choose the simplest parametrization we can think of:

$$\mathbf{r}(t) = t\mathbf{i} + t\mathbf{j} + t\mathbf{k}, \quad 0 \leq t \leq 1.$$

The components have continuous first derivatives and $|\mathbf{v}(t)| = |\mathbf{i} + \mathbf{j} + \mathbf{k}| = \sqrt{1^2 + 1^2 + 1^2} = \sqrt{3}$ is never 0, so the parametrization is smooth. The integral of f over C is

$$\begin{aligned} \int_C f(x, y, z) ds &= \int_0^1 f(t, t, t)(\sqrt{3}) dt && \text{Equation (2)} \\ &= \int_0^1 (t - 3t^2 + t)\sqrt{3} dt \\ &= \sqrt{3} \int_0^1 (2t - 3t^2) dt = \sqrt{3} [t^2 - t^3]_0^1 = 0. \quad \blacksquare \end{aligned}$$

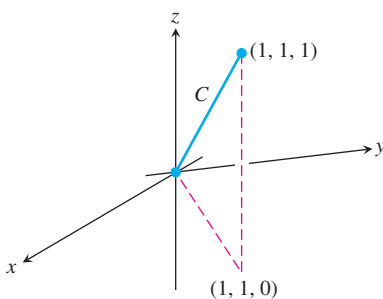


FIGURE 16.2 The integration path in Example 1.

Additivity

Line integrals have the useful property that if a curve C is made by joining a finite number of curves C_1, C_2, \dots, C_n end to end, then the integral of a function over C is the sum of the integrals over the curves that make it up:

$$\int_C f \, ds = \int_{C_1} f \, ds + \int_{C_2} f \, ds + \cdots + \int_{C_n} f \, ds. \quad (3)$$

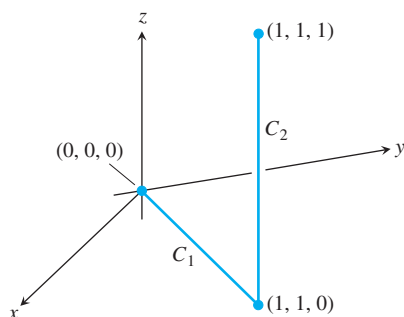


FIGURE 16.3 The path of integration in Example 2.

EXAMPLE 2 Line Integral for Two Joined Paths

Figure 16.3 shows another path from the origin to $(1, 1, 1)$, the union of line segments C_1 and C_2 . Integrate $f(x, y, z) = x - 3y^2 + z$ over $C_1 \cup C_2$.

Solution We choose the simplest parametrizations for C_1 and C_2 we can think of, checking the lengths of the velocity vectors as we go along:

$$C_1: \mathbf{r}(t) = t\mathbf{i} + t\mathbf{j}, \quad 0 \leq t \leq 1; \quad |\mathbf{v}| = \sqrt{1^2 + 1^2} = \sqrt{2}$$

$$C_2: \mathbf{r}(t) = \mathbf{i} + \mathbf{j} + t\mathbf{k}, \quad 0 \leq t \leq 1; \quad |\mathbf{v}| = \sqrt{0^2 + 0^2 + 1^2} = 1.$$

With these parametrizations we find that

$$\int_{C_1 \cup C_2} f(x, y, z) \, ds = \int_{C_1} f(x, y, z) \, ds + \int_{C_2} f(x, y, z) \, ds \quad \text{Equation (3)}$$

$$= \int_0^1 f(t, t, 0)\sqrt{2} \, dt + \int_0^1 f(1, 1, t)(1) \, dt \quad \text{Equation (2)}$$

$$= \int_0^1 (t - 3t^2 + 0)\sqrt{2} \, dt + \int_0^1 (1 - 3 + t)(1) \, dt$$

$$= \sqrt{2} \left[\frac{t^2}{2} - t^3 \right]_0^1 + \left[\frac{t^2}{2} - 2t \right]_0^1 = -\frac{\sqrt{2}}{2} - \frac{3}{2}. \quad \blacksquare$$

Notice three things about the integrations in Examples 1 and 2. First, as soon as the components of the appropriate curve were substituted into the formula for f , the integration became a standard integration with respect to t . Second, the integral of f over $C_1 \cup C_2$ was obtained by integrating f over each section of the path and adding the results. Third, the integrals of f over C and $C_1 \cup C_2$ had different values. For most functions, the value of the integral along a path joining two points changes if you change the path between them. For some functions, however, the value remains the same, as we will see in Section 16.3.

Mass and Moment Calculations

We treat coil springs and wires like masses distributed along smooth curves in space. The distribution is described by a continuous density function $\delta(x, y, z)$ (mass per unit length). The spring's or wire's mass, center of mass, and moments are then calculated with the formulas in Table 16.1. The formulas also apply to thin rods.

TABLE 16.1 Mass and moment formulas for coil springs, thin rods, and wires lying along a smooth curve C in space

Mass: $M = \int_C \delta(x, y, z) ds$ ($\delta = \delta(x, y, z) = \text{density}$)

First moments about the coordinate planes:

$$M_{yz} = \int_C x \delta ds, \quad M_{xz} = \int_C y \delta ds, \quad M_{xy} = \int_C z \delta ds$$

Coordinates of the center of mass:

$$\bar{x} = M_{yz}/M, \quad \bar{y} = M_{xz}/M, \quad \bar{z} = M_{xy}/M$$

Moments of inertia about axes and other lines:

$$I_x = \int_C (y^2 + z^2) \delta ds, \quad I_y = \int_C (x^2 + z^2) \delta ds$$

$$I_z = \int_C (x^2 + y^2) \delta ds, \quad I_L = \int_C r^2 \delta ds$$

$r(x, y, z) = \text{distance from the point } (x, y, z) \text{ to line } L$

Radius of gyration about a line L : $R_L = \sqrt{I_L/M}$

EXAMPLE 3 Finding Mass, Center of Mass, Moment of Inertia, Radius of Gyration

A coil spring lies along the helix

$$\mathbf{r}(t) = (\cos 4t)\mathbf{i} + (\sin 4t)\mathbf{j} + t\mathbf{k}, \quad 0 \leq t \leq 2\pi.$$

The spring's density is a constant, $\delta = 1$. Find the spring's mass and center of mass, and its moment of inertia and radius of gyration about the z -axis.

Solution We sketch the spring (Figure 16.4). Because of the symmetries involved, the center of mass lies at the point $(0, 0, \pi)$ on the z -axis.

For the remaining calculations, we first find $|\mathbf{v}(t)|$:

$$\begin{aligned} |\mathbf{v}(t)| &= \sqrt{\left(\frac{dx}{dt}\right)^2 + \left(\frac{dy}{dt}\right)^2 + \left(\frac{dz}{dt}\right)^2} \\ &= \sqrt{(-4 \sin 4t)^2 + (4 \cos 4t)^2 + 1} = \sqrt{17}. \end{aligned}$$

We then evaluate the formulas from Table 16.1 using Equation (2):

$$M = \int_{\text{Helix}} \delta ds = \int_0^{2\pi} (1)\sqrt{17} dt = 2\pi\sqrt{17}$$

$$\begin{aligned} I_z &= \int_{\text{Helix}} (x^2 + y^2)\delta ds = \int_0^{2\pi} (\cos^2 4t + \sin^2 4t)(1)\sqrt{17} dt \\ &= \int_0^{2\pi} \sqrt{17} dt = 2\pi\sqrt{17} \end{aligned}$$

$$R_z = \sqrt{I_z/M} = \sqrt{2\pi\sqrt{17}/(2\pi\sqrt{17})} = 1.$$

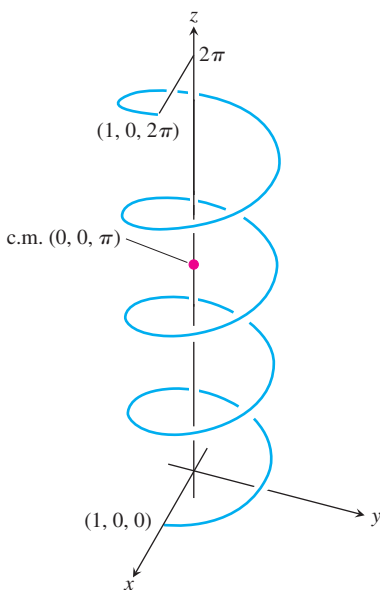


FIGURE 16.4 The helical spring in Example 3.

Notice that the radius of gyration about the z -axis is the radius of the cylinder around which the helix winds. ■

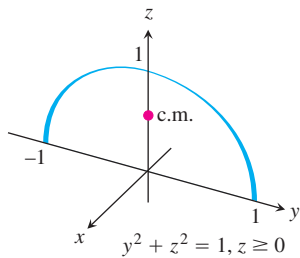


FIGURE 16.5 Example 4 shows how to find the center of mass of a circular arch of variable density.

EXAMPLE 4 Finding an Arch's Center of Mass

A slender metal arch, denser at the bottom than top, lies along the semicircle $y^2 + z^2 = 1$, $z \geq 0$, in the yz -plane (Figure 16.5). Find the center of the arch's mass if the density at the point (x, y, z) on the arch is $\delta(x, y, z) = 2 - z$.

Solution We know that $\bar{x} = 0$ and $\bar{y} = 0$ because the arch lies in the yz -plane with its mass distributed symmetrically about the z -axis. To find \bar{z} , we parametrize the circle as

$$\mathbf{r}(t) = (\cos t)\mathbf{j} + (\sin t)\mathbf{k}, \quad 0 \leq t \leq \pi.$$

For this parametrization,

$$|\mathbf{v}(t)| = \sqrt{\left(\frac{dx}{dt}\right)^2 + \left(\frac{dy}{dt}\right)^2 + \left(\frac{dz}{dt}\right)^2} = \sqrt{(0)^2 + (-\sin t)^2 + (\cos t)^2} = 1.$$

The formulas in Table 16.1 then give

$$M = \int_C \delta \, ds = \int_C (2 - z) \, ds = \int_0^\pi (2 - \sin t)(1) \, dt = 2\pi - 2$$

$$\begin{aligned} M_{xy} &= \int_C z\delta \, ds = \int_C z(2 - z) \, ds = \int_0^\pi (\sin t)(2 - \sin t) \, dt \\ &= \int_0^\pi (2 \sin t - \sin^2 t) \, dt = \frac{8 - \pi}{2} \end{aligned}$$

$$\bar{z} = \frac{M_{xy}}{M} = \frac{8 - \pi}{2} \cdot \frac{1}{2\pi - 2} = \frac{8 - \pi}{4\pi - 4} \approx 0.57.$$

With \bar{z} to the nearest hundredth, the center of mass is $(0, 0, 0.57)$. ■